



Escola de Educação Básica Municipal Madre Leontina

Turma: 5º Ano

Período de execução das atividades: 10/08 a 14/08/2020

Aluno: Eric Cassiano Pereira da Silva

## PLANEJAMENTO PARA 10 DE AGOSTO A 14 DE AGOSTO DE 2020

### SEGUNDA-FEIRA

Assistir ao vídeo que a professora encaminhará, através do link:

[https://www.youtube.com/watch?v=zXeES-W\\_56o](https://www.youtube.com/watch?v=zXeES-W_56o)

1) Assistir ao vídeo do Youtube:

<https://www.youtube.com/watch?v=vUUeZJ6Cg7s>

2) JUNTE A CONSOANTE **D** COM AS VOGAIS E FORME SÍLABAS: (EF01LP06 – EF01LP07 – EF01LP08)

D + A = \_\_\_\_\_

D + E = \_\_\_\_\_

D + I = \_\_\_\_\_

D + O = \_\_\_\_\_

D + U = \_\_\_\_\_

4) RESOLVA A ATIVIDADE: (EF01LP08 – EF01LP09)

ESCREVA AS LETRAS QUE FALTAM.




D	A	D	O
	A		O
			O
D			



D	E	D	O
	E	D	
D		D	



C	A	D	E	A	D	O
	A		E	A		O
C		D			D	
C			E			



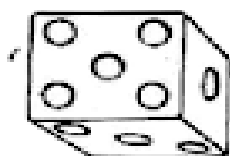
D	A	M	A
	A		A
D		M	



D

QUARTA-FEIRA


5) COMPLETE AS PALAVRAS COM AS SÍLABAS DA, DE, DI, DO E DU:  
(EP01LP08 – EF01LP09)



DO



BO



CABI



CA  ADO



DA



IS



DO



NHEIRO



VI




CE

QUINTA-FEIRA

6) RESOLVA AS ADIÇÕES: (EF01MA06)

**Adição 10** Nome: \_\_\_\_\_



$2 + 3 = \underline{\quad}$	
$5 + 5 = \underline{\quad}$	
$6 + 4 = \underline{\quad}$	$2 + 7 = \underline{\quad}$
$3 + 7 = \underline{\quad}$	$3 + 3 = \underline{\quad}$
$5 + 2 = \underline{\quad}$	$5 + 5 = \underline{\quad}$
$1 + 8 = \underline{\quad}$	$7 + 1 = \underline{\quad}$
$8 + 2 = \underline{\quad}$	$1 + 9 = \underline{\quad}$
$7 + 3 = \underline{\quad}$	$4 + 4 = \underline{\quad}$

SEXTA-FEIRA

7) RESOLVA AS SUBTRAÇÕES: (EF01MA06)

$\begin{array}{r} 5 \\ - 4 \\ \hline \end{array}$	$\begin{array}{r} 3 \\ - 1 \\ \hline \end{array}$	$\begin{array}{r} 2 \\ - 1 \\ \hline \end{array}$	$\begin{array}{r} 4 \\ - 2 \\ \hline \end{array}$
$\begin{array}{r} 2 \\ - 2 \\ \hline \end{array}$	$\begin{array}{r} 9 \\ - 6 \\ \hline \end{array}$	$\begin{array}{r} 4 \\ - 3 \\ \hline \end{array}$	$\begin{array}{r} 6 \\ - 5 \\ \hline \end{array}$
$\begin{array}{r} 8 \\ - 3 \\ \hline \end{array}$	$\begin{array}{r} 7 \\ - 2 \\ \hline \end{array}$	$\begin{array}{r} 7 \\ - 3 \\ \hline \end{array}$	$\begin{array}{r} 8 \\ - 6 \\ \hline \end{array}$
$\begin{array}{r} 5 \\ - 5 \\ \hline \end{array}$	$\begin{array}{r} 9 \\ - 2 \\ \hline \end{array}$	$\begin{array}{r} 6 \\ - 1 \\ \hline \end{array}$	$\begin{array}{r} 5 \\ - 3 \\ \hline \end{array}$

OBS: As atividades resolvidas devem ser enviadas via WhatsApp.