



ESCOLA DE EDUCAÇÃO BÁSICA MUNICIPAL MADRE LEONTINA

DATA: ____ DE _____ DE 2021.

PROFESSORA: ESTER LAÍS DOBBERT THOMÉ.

ALUNO (A): _____ 1º ANO.


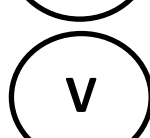
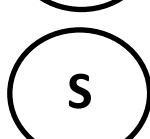
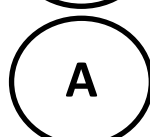
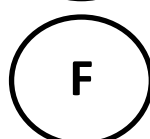
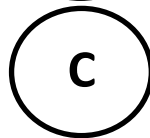




AVALIAÇÃO DIAGNÓSTICA DE LÍNGUA PORTUGUESA

1- COMPLETE O ALFABETO COM AS LETRAS QUE FALTAM, DEPOIS PINTE AS VOGAIS DE AMARELO E AS CONSOANTES DE AZUL. (VALE 2,5 PONTOS – 0,15 CADA ACERTO).




A			D		F			I
		L		N			Q	
	T		V	W			Z	



2- LIGUE A LETRA INICIAL DE CADA FIGURA. (VALE 3 PONTOS – 0,5 CADA ACERTO).




3- OBSERVE AS IMAGENS A SEGUIR E PINTE O NOME CORRESPONDENTE.
(VALE 1,5 PONTOS – 0,5 CADA ACERTO).

		
AZUL	GOMA	BICO
ABACAXI	GELO	BOLA
AMIGO	GATO	BULE

4- ESCREVA AS LETRAS QUE A PROFESSORA DITAR.
(VALE 1,5 PONTOS – 0,3 CADA ACERTO).

--	--	--	--	--

5- PINTE A SÍLABA INICIAL DO NOME DA FIGURA ABAIXO.
(VALE 1,5 PONTOS).



CO

VE

LI

BA

FU



ESCOLA DE EDUCAÇÃO BÁSICA MUNICIPAL MADRE LEONTINA

DATA: ____ DE _____ DE 2021.

PROFESSORA: ESTER LAÍS DOBBERT THOMÉ.

ALUNO (A): _____ 1º ANO.


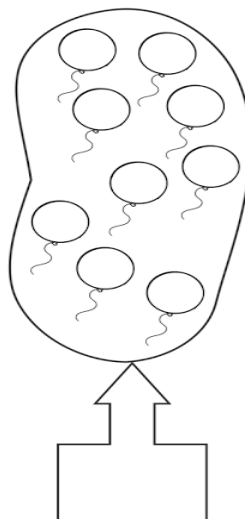

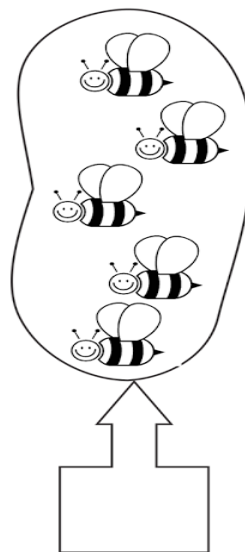
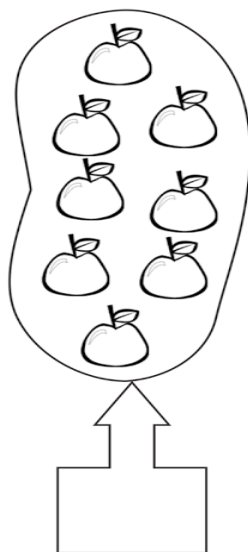
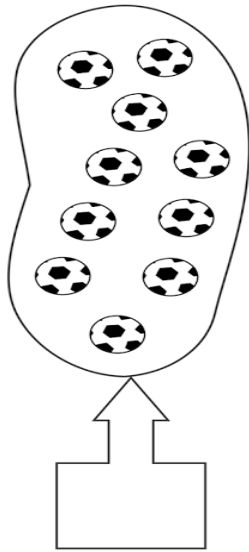
AVALIAÇÃO DIAGNÓSTICA DE MATEMÁTICA

1- COMPLETE OS NÚMEROS DE 1 A 15 QUE ESTÃO FALTANDO.
(VALE 3,0 PONTOS – 0,25 CADA ACERTO).




1				
	7			
				15

2- CONTE OS ELEMENTOS DOS CONJUNTOS E ESCRIVE O NÚMERO CORRESPONDENTE NO ESPAÇO. (VALE 4,0 PONTOS – 0,2 CADA ACERTO).



3- OBSERVE O GRÁFICO DE BRINQUEDOS DE RAFAEL. PINTE A QUANTIDADE, OBSERANDO A TABELA AO LADO.
(VALE 4,0 PONTOS – 0,2 CADA ACERTO).



RESPONDA:

- a) QUAL BRINQUEDO RAFAEL TEM EM MENOR QUANTIDADE? _____
- b) QUAL TEM EM MAIOR QUANTIDADE? _____
- c) QUAL A SOMA DE PIPAS E BICICLETAS? _____